



Task Title: Using a Provincial Park Map

OALCF Cover Sheet – Learner Copy

Learner Name: _____

Date Started: _____

Date Completed: _____

Successful Completion: Yes ☐ No ☐

Goal Path: Employment ☐ Apprenticeship ☐

Secondary School ☐ Post Secondary ☐ Independence ☐

Task Description: The learner will look at a park map and identify locations and routes.

Main Competency/Task Group/Level Indicator:

- Find and Use Information/Interpret documents/A2.2

Materials Required:

- Pen/pencil/highlighter and paper

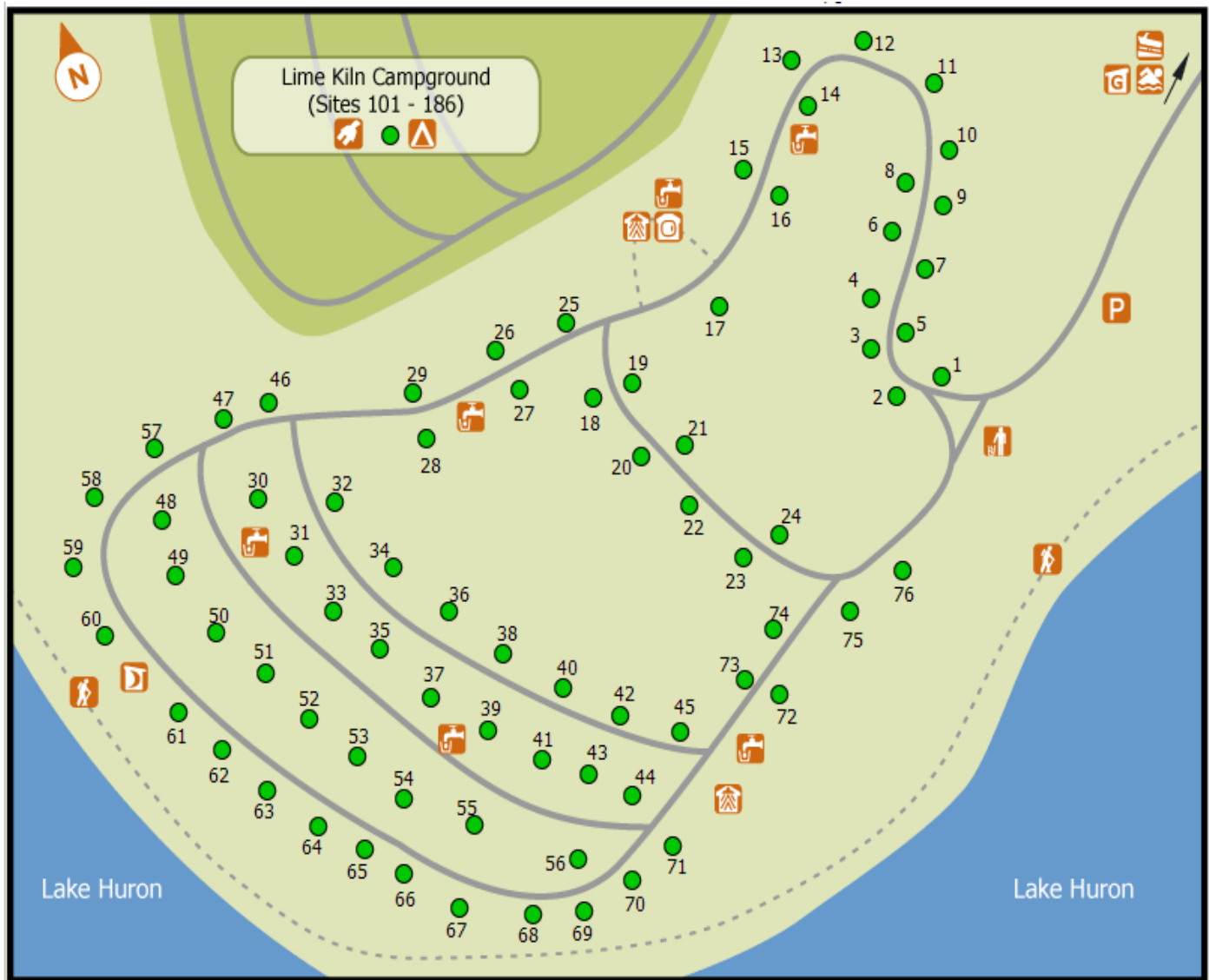
Task Title: UsingProvincialParkMap_I_A2.2

Learner Information

When visiting a park, many people will use a map and legend to find their way around.

Scan the “Park Map” and “Map Icons Legend”.








Park Map



Task Title: UsingProvincialParkMap_I_A2.2

Map Icons Legend					
Symbol	Meaning	Symbol	Meaning	Symbol	Meaning
	Electrical Campsite		Non - Electrical Camping		Parking
	Group Camping		Information		Visitor Center
	Gatehouse		Park Office		Park Store
	Garbage		Recycling		Trailer Dumping
	Trailer Filling		Water Tap		Pit/Vault Toilet
	Comfort Station		Comfort Station with Showers		Laundry Facilities
	Radio Free		Wheel Chair Accessible		Boat Launch
	Day Use Area		Picnic Shelter		Water/Canoe Route
	Park Property		Private Property		Portage Routes
	Beach		Amphitheater		Fishing / Cleaning Station
	Campfire Circle		Swimming		Playground
	Hiking		Canoeing		Canoe Launch
	Canoe Rack		Horseshoes		Ball Diamond / Play Field
	Pay Phone		Marsh		Volleyball / Basketball Court
	Biking		Cemetery		Change Room
	Church		Emergency Phone		Grocery
	Firewood		First Aid		Picnic Area
	Group Picnic Area		Horse Back Riding		Lookout

Task Title: UsingProvincialParkMap_I_A2.2

Map Icons Legend					
Symbol	Meaning	Symbol	Meaning	Symbol	Meaning
	Organic Waste		Exercise Area		Pet Free
	Portage		Warming Hut		Self-Serve Fee Station
	Walk-in Campsite				

Work Sheet

Task 1: On the map, circle the showers bathroom closest to site #75.

Answer: No written response required here.

Task completed: Yes: ☐

Task 2: Circle the water tap closest to site #75.

Answer: No written response required here.

Task completed: Yes: ☐

Task 3: Circle the designated parking area.

Answer: No written response required here.

Task completed: Yes: ☐

Task 4: Draw the road route you would take from site #75 to the designated swimming area.

Answer: No written response required here.

Task completed: Yes: ☐